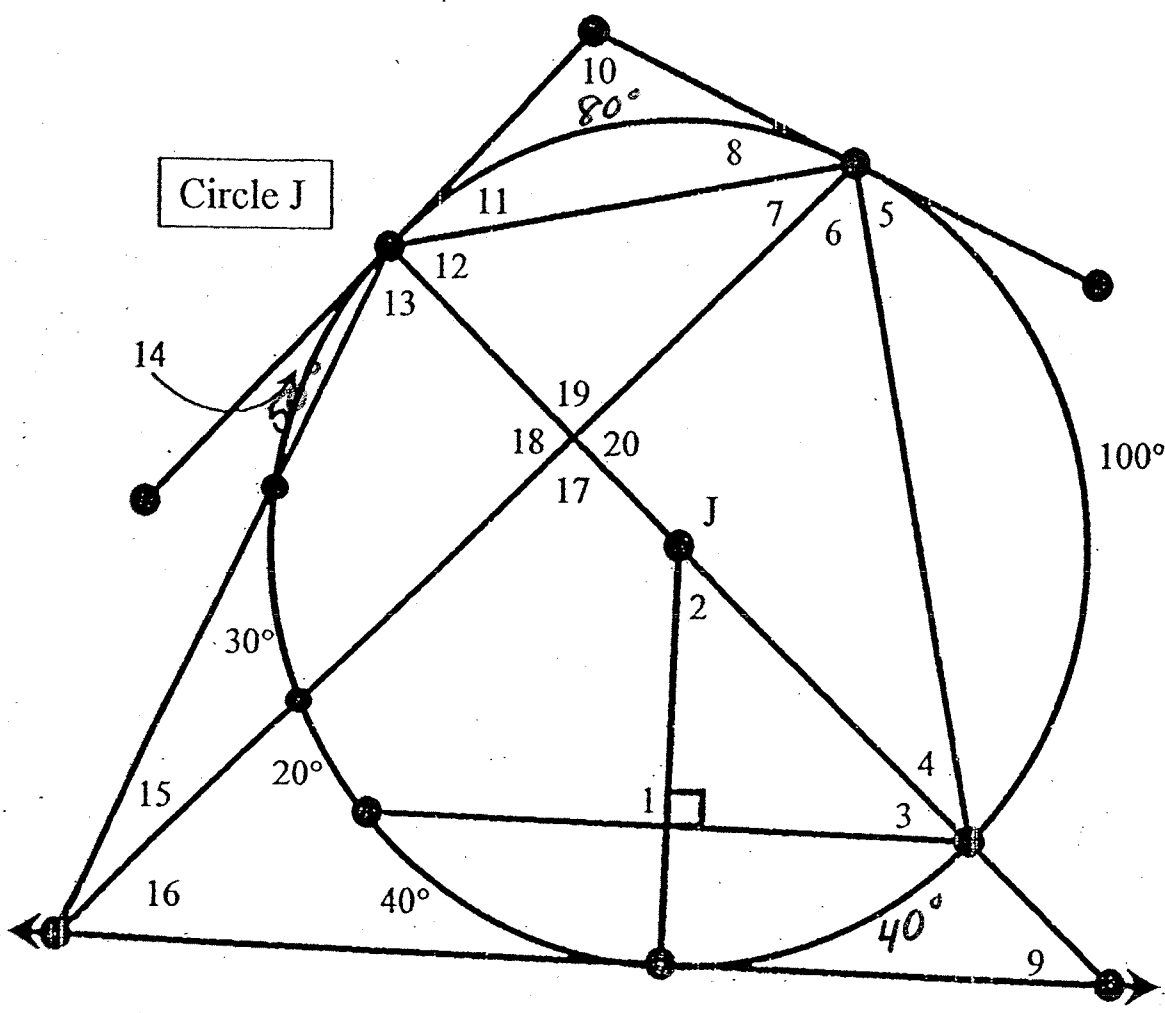


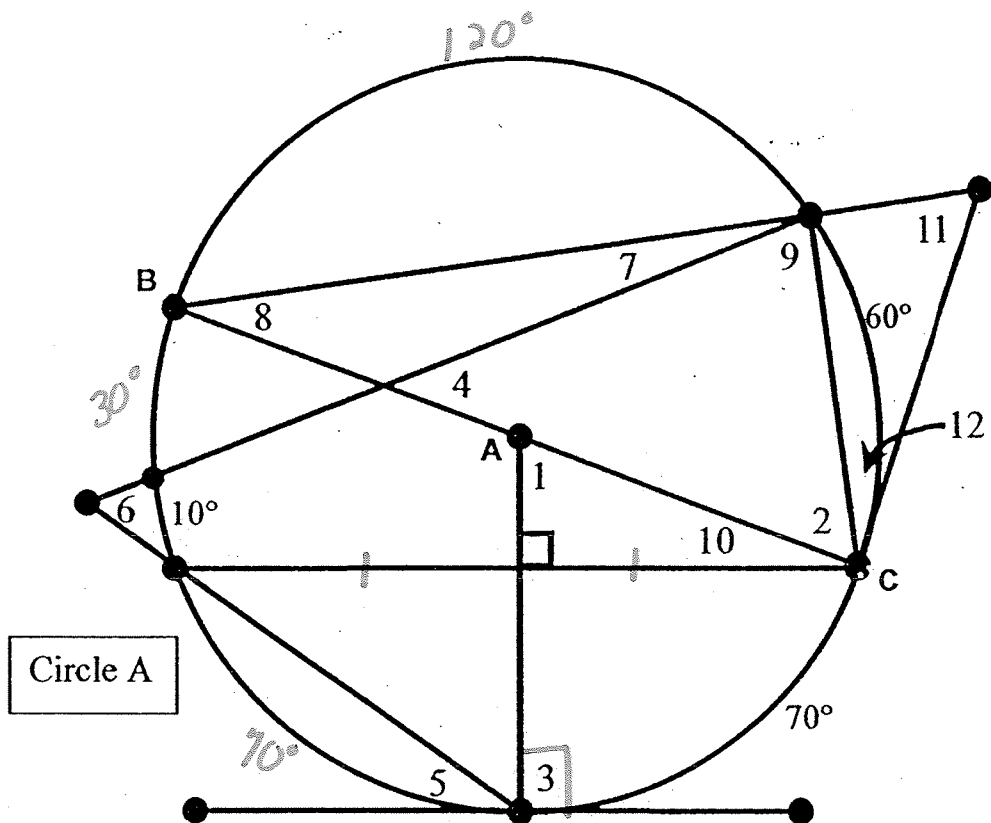
Answer Key



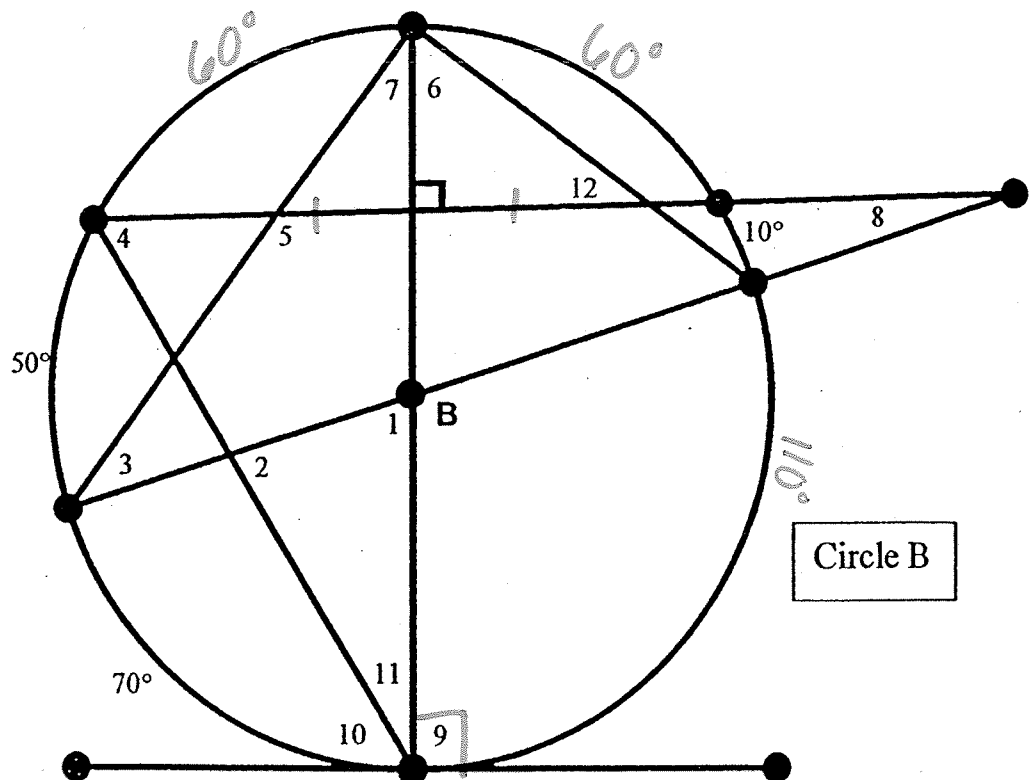
$m\angle 1 = 90$	$m\angle 6 = 50$	$m\angle 11 = 40$	$m\angle 16 = 40$
$m\angle 2 = 40$	$m\angle 7 = 40$	$m\angle 12 = 50$	$m\angle 17 = 90$
$m\angle 3 = 50$	$m\angle 8 = 40$	$m\angle 13 = 65$	$m\angle 18 = 90$
$m\angle 4 = 40$	$m\angle 9 = 50$	$m\angle 14 = 25$	$m\angle 19 = 90$
$m\angle 5 = 50$	$m\angle 10 = 100$	$m\angle 15 = 25$	$m\angle 20 = 90$

# AWESOME AND FUN CIRCLE PROBLEMS

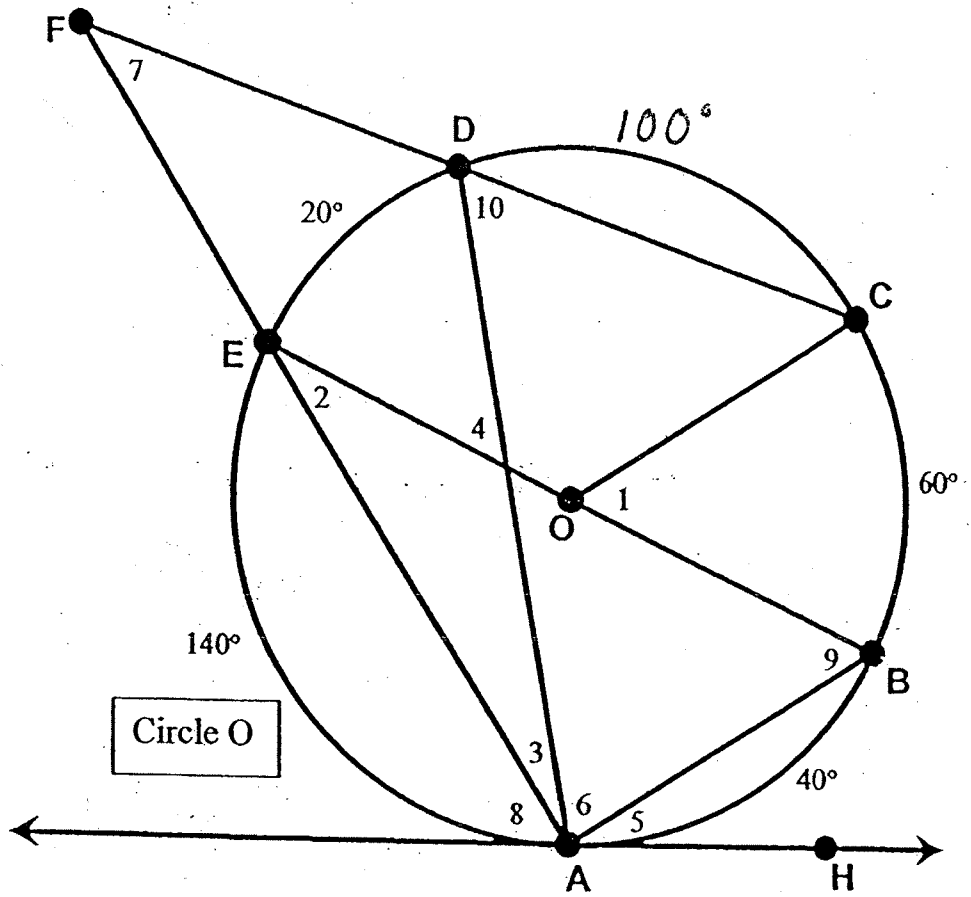
$m\angle 1 = 70$
$m\angle 2 = 60$
$m\angle 3 = 90$
$m\angle 4 = 45$
$m\angle 5 = 35$
$m\angle 6 = 60$
$m\angle 7 = 15$
$m\angle 8 = 30$
$m\angle 9 = 75$
$m\angle 10 = 20$
$m\angle 11 = 60$
$m\angle 12 = 30$



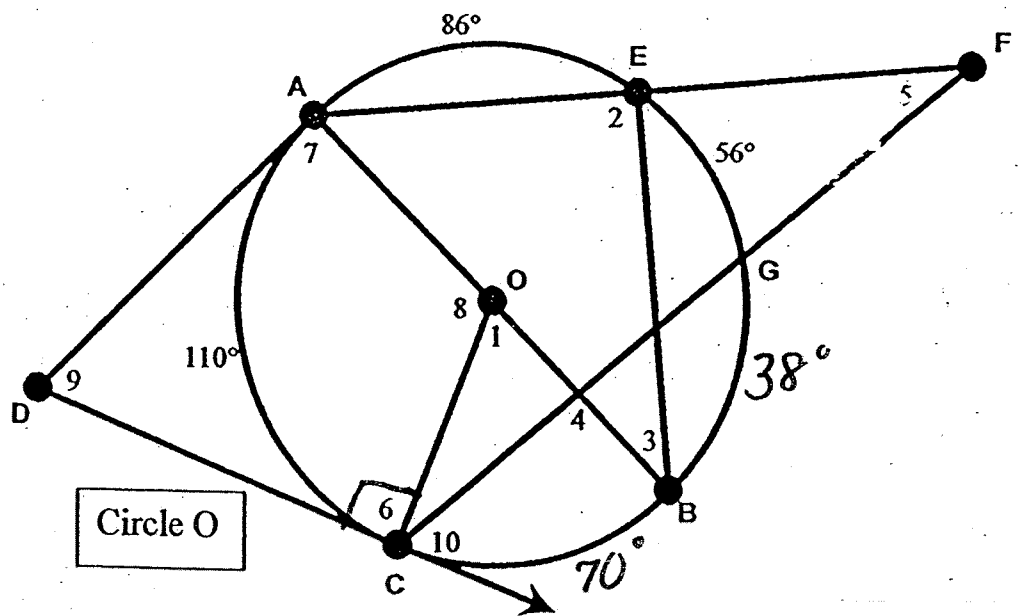
$m\angle 1 = 70$
$m\angle 2 = 80$
$m\angle 3 = 35$
$m\angle 4 = 60$
$m\angle 5 = 125$
$m\angle 6 = 55$
$m\angle 7 = 35$
$m\angle 8 = 20$
$m\angle 9 = 90$
$m\angle 10 = 60$
$m\angle 11 = 30$
$m\angle 12 = 35$



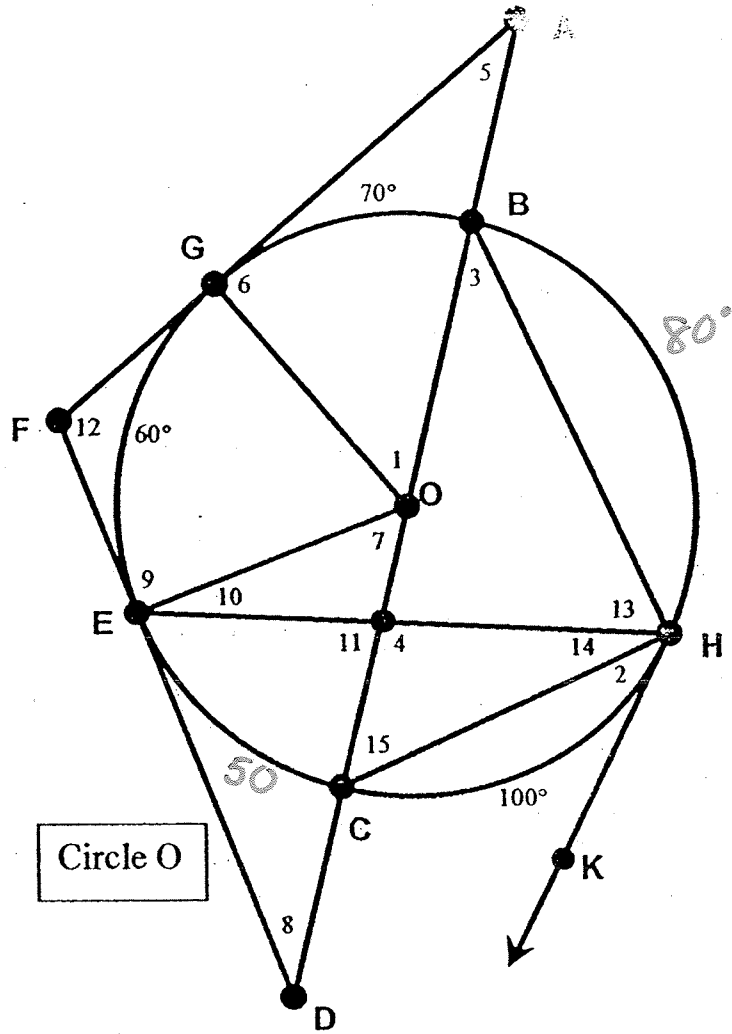
$m\angle 1 =$	60
$m\angle 2 =$	20
$m\angle 3 =$	10
$m\angle 4 =$	30
$m\angle 5 =$	20
$m\angle 6 =$	80
$m\angle 7 =$	40
$m\angle 8 =$	70
$m\angle 9 =$	70
$m\angle 10 =$	50



$m\angle 1 =$	70
$m\angle 2 =$	90
$m\angle 3 =$	43
$m\angle 4 =$	106
$m\angle 5 =$	27
$m\angle 6 =$	90
$m\angle 7 =$	90
$m\angle 8 =$	110
$m\angle 9 =$	70
$m\angle 10 =$	54



$m\angle 1 = 70$
$m\angle 2 = 50$
$m\angle 3 = 50$
$m\angle 4 = 115$
$m\angle 5 = 20$
$m\angle 6 = 90$
$m\angle 7 = 50$
$m\angle 8 = 40$
$m\angle 9 = 90$
$m\angle 10 = 15$
$m\angle 11 = 65$
$m\angle 12 = 120$
$m\angle 13 = 65$
$m\angle 14 = 25$
$m\angle 15 = 40$



$m\angle 1 = 70$	$m\angle 11 = 35$
$m\angle 2 = 70$	$m\angle 12 = 35$
$m\angle 3 = 110$	$m\angle 13 = 30$
$m\angle 4 = 110$	$m\angle 14 = 55$
$m\angle 5 = 25$	$m\angle 15 = 55$
$m\angle 6 = 90$	$m\angle 16 = 60$
$m\angle 7 = 65$	$m\angle 17 = 35$
$m\angle 8 = 55$	$m\angle 18 = 85$
$m\angle 9 = 55$	$m\angle 19 = 95$
$m\angle 10 = 35$	$m\angle 20 = 95$

